

JEE ADVANCED-2015

CHEMISTRY

Note: Answers have been highlighted in “Yellow” color and Explanations to answers are given at the end

Read the instructions carefully:

General Instructions:

1. This sealed booklet is your Question Paper. Do not break the seal till you are instructed to do so.
2. The question paper CODE is printed on the left hand top corner of this sheet and the right hand top corner of the back cover of this booklet.
3. Use the Optical Response Sheet (ORS) provided separately for answering the questions.
4. The ORS CODE is printed on its left part as well as the right part. Ensure that both these codes are identical and same as that on the question paper booklet. If not, contact the invigilator.
5. Blank spaces are provided within this booklet for rough work.
6. Write your name and roll number in the space provided on the back cover of this booklet.
7. After breaking the seal of the booklet. Verify that the booklet contains 32 pages and that all the 60 questions along with the options are legible.

Question paper format and marking scheme :

8. The question paper has three parts: Physics, Chemistry and Mathematics. Each part has three sections.
9. Carefully read the instructions given at the beginning of each section.
10. Section 1 contains 8 questions. The answer to each question is a single digit integer ranging from 0 to 9 (both inclusive).

Marking scheme: +4 correct answer and 0 in all other cases.

11. Section 2 contains 10 multiple choice questions with one or more than one correct option.

Marking scheme: +4 for correct answer, 0 if not attempted and -2 in all other cases.

12. Section 3 contains 2 “ match the following” type questions and you will have to match entries in Column I with the entries in Column II.

Marking scheme: for each entry in Column I, +2 for correct answer, 0 if not attempted and - 1 in all other cases.

OPTICAL RESPONSE SHEET :

13. The ORS consists of an original (top sheet) and its carbon-less copy. (bottom sheet).

14. Darken the appropriate bubbles on the original by applying sufficient pressure. This will leave an impression at the corresponding place on the carbon-less copy.

15. The original is machine-gradable and will be collected by the invigilator at the end of the examination.

16. You will be allowed to take away the carbon-less copy at the end of the examination.

17. Do not tamper with or mutilate the ORS.

18. Write your name, roll number and the name of the examination center and sign with pen in the space provided for this purpose on the original. Do not write any of these details anywhere else. Darken the appropriate bubble under each digit of your roll number.

Note: Answers have been highlighted in “Yellow” color and Explanations to answers are given at the end

SECTION-1 (Maximum Mark : 32)

- This section contains **EIGHT** questions.
- The answer to each question is a **SINGLE DIGIT INTEGER** ranging from 0 to 9, both inclusive
- For each question, darken the bubble corresponding to the correct integer in the ORS
- Marking scheme:
+4 If the bubble corresponding to the answer is darkened
0 In all other cases

Q.21 If the freezing point of a 0.01 molal aqueous solution of a cobalt (III)chloride–ammonia complex (which behaves as a strong electrolyte) is -0.0558°C , the number of chloride(s) in the coordination sphere of the complex is

$$[K_f \text{ of water} = 1.86 \text{ K kg mol}^{-1}]$$

Q.22 All the energy released from the reaction $X \rightarrow Y, \Delta_r G^{\circ} = -193 \text{ KJ mol}^{-1}$ is used for oxidizing M^+ as $M^+ \rightarrow M^{3+} + 2e^-, E^{\circ} = -0.25 \text{ V}$

Under standard conditions, the number of moles of M^+ oxidized when one mole of X is converted to Y is

$$[F = 96500 \text{ C mol}^{-1}]$$

Q.23 For the octahedral complexes of Fe^{3+} in SCN^- (thiocyanato) and in CN^- ligand environments, the difference between the spin-only magnetic moments in Bohr magnetons (when approximated to the nearest integer) is

$$[\text{Atomic number of Fe} = 26]$$

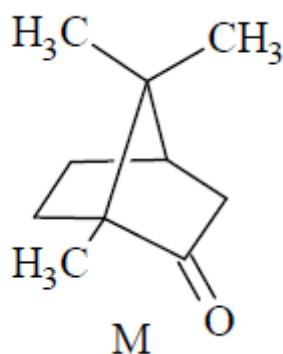
Q.24 The total number of lone pairs of electrons in N_2O_3 is

Q.25 Among the triatomic molecules/ions, $BeCl_2$, N_3^- , N_2O , NO_2^+ , O_3 , SCl_2 , ICl_2^- , I_3^- and XeF_2 , the total number of linear molecule(s)/ion(s) where the hybridization of the central atom does not have contribution from the d-orbital(s) is

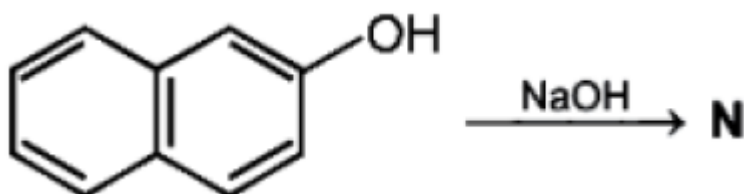
[Atomic number: S=16, Cl=17, I=53 and Xe=54]

Q.26 Not considering the electronic spin, the degeneracy of the second excited state ($n=3$) of H atom is 9, while the degeneracy of the second excited state of H^- is

Q.27 The total number of stereoisomers that can exist for M is



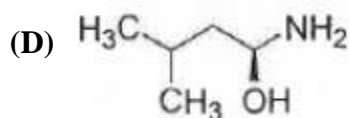
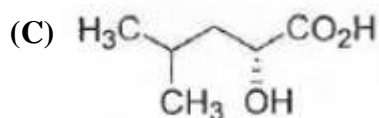
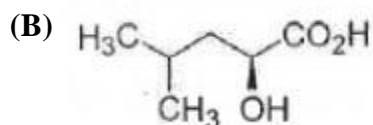
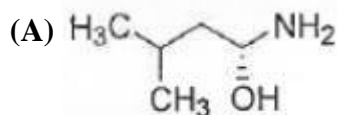
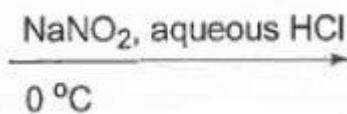
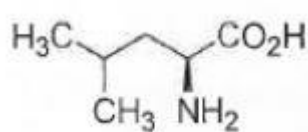
Q.28 The number of resonance structures for N is



SECTION-2 (Maximum Mark : 40)

- This section contains **TEN** questions.
- Each question has **FOUR** options (A), (B), (C) and (D) **ONE OR MORE THAN ONE** of these four option(s) is(are) correct.
- For each question, darken the bubble(s) corresponding to all the correct option(s) in the ORS
- Marking scheme:
 - +4 If only the bubble(s) corresponding to all the correct option(s) is(are) darkened
 - 0 If none of the bubbles is darkened
 - 2 In all other cases

Q.29 The major product of the reaction is



Q.30 The correct statement(s) about Cr^{2+} and Mn^{3+} is(are)

[Atomic number of Cr=24 and Mn=25]

- (A) Cr^{2+} is a reducing agent
- (B) Mn^{3+} is an oxidizing agent
- (C) Both Cr^{2+} and Mn^{3+} exhibit d^4 electronic configuration
- (D) When Cr^{2+} is used as a reducing agent, the chromium ion attains d^5 electronic configuration

Q.31 Copper is purified by electrolytic refining of blister copper, The correct statement(s) about this process is (are)

- (A) Impure Cu strip is used as cathode
- (B) Acidified aqueous CuSO_4 is used as electrolyte
- (C) Pure copper deposits at cathode
- (D) Impurities settle as anode-mud

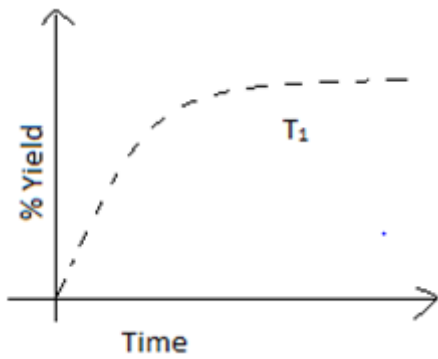
Q.32 Fe^{3+} is reduced to Fe^{2+} by using

- (A) H_2O_2 in presence of NaOH
- (B) Na_2O_2 in water
- (C) H_2O_2 in presence of H_2SO_4
- (D) Na_2O_2 presence of H_2SO_4

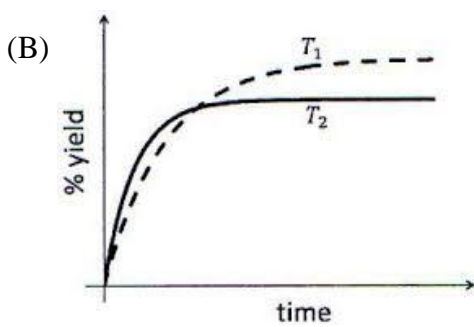
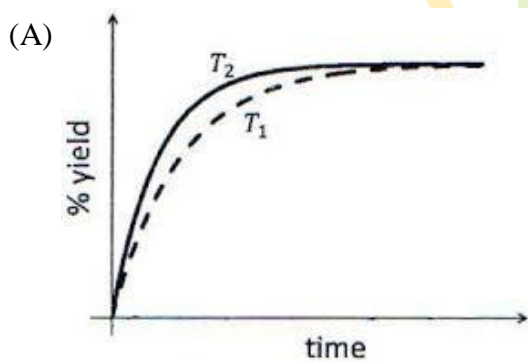
Q.33 The % yield of ammonia as a function of time in the reaction

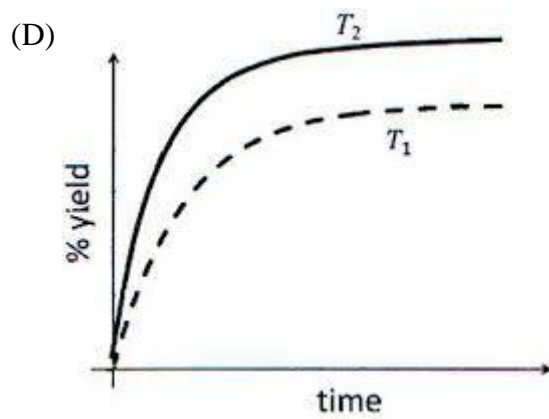
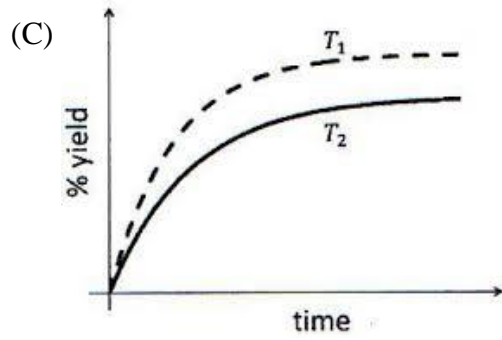
$$\text{N}_2(\text{g}) + 3\text{H}_2(\text{g}) \rightleftharpoons 2\text{NH}_3(\text{g}), \Delta H < 0$$

At (P, T_1) is given below.



If this reaction is conducted at (P, T_2) , with $T_2 > T_1$, the % yield of ammonia as a function of time is represented by

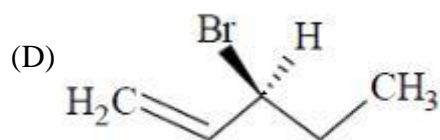
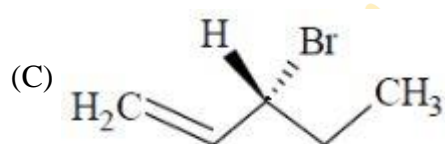
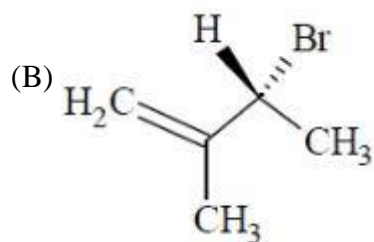
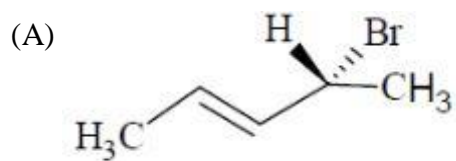




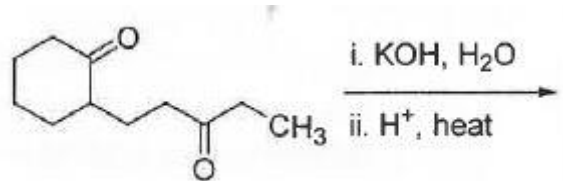
Q.34 If the unit cell of a mineral has cubic close packed (ccp) array of oxygen atoms with m fraction of octahedral holes occupied by aluminium ions and n fraction of tetrahedral holes occupied by magnesium ions, m and n , respectively, are

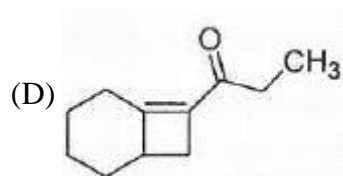
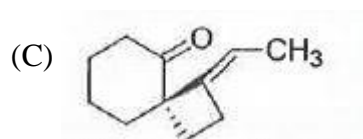
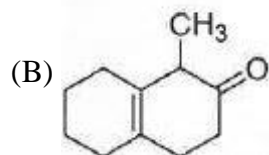
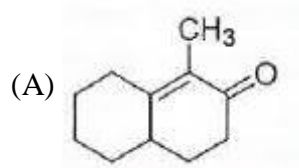
- (A) $\frac{1}{2}, \frac{1}{8}$
- (B) $1, \frac{1}{4}$
- (C) $\frac{1}{2}, \frac{1}{2}$
- (D) $\frac{1}{4}, \frac{1}{8}$

Q.35 Compound(s) that on hydrogenation produce(s) optically inactive compound(s) is(are)

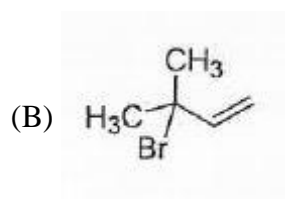
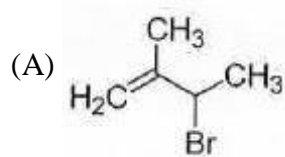
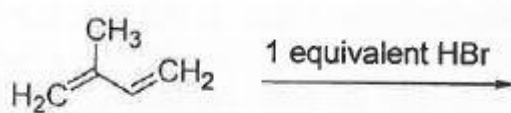


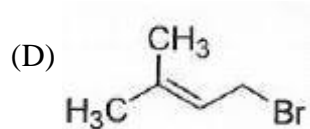
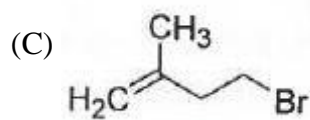
Q.36 The major product of the following reaction is



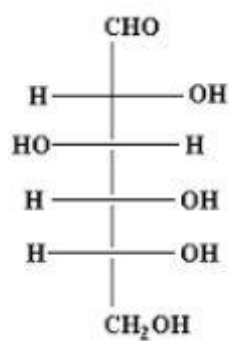


Q.37 In the following reaction, the major product is

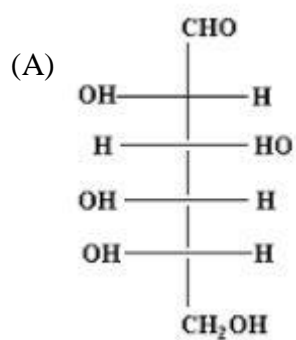


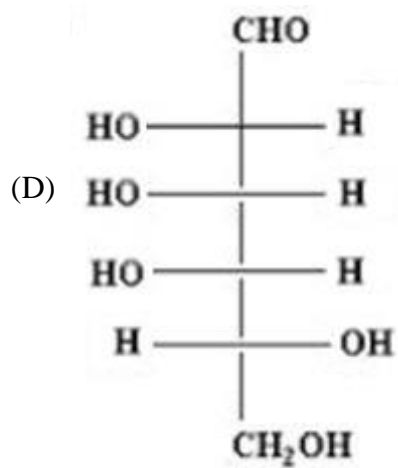
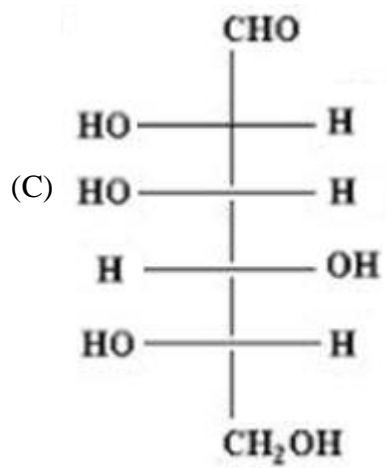
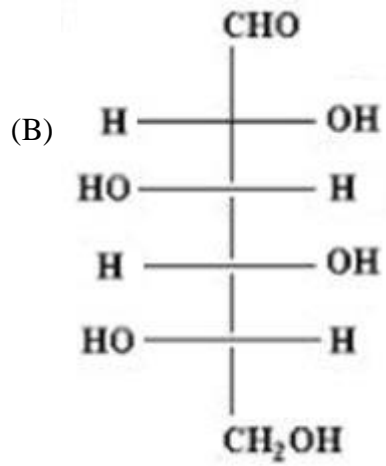


Q.38 The structure of D.(+)- glucose is



The structure of L-(-)- glucose is





SECTION-3 (Maximum Mark : 16)

- This section contains **TWO** questions.
- Each question contains two columns, **Column I** and **Column II**
- Column I has four entries (A), (B), (C) and (D)
- Column II has five entries (P), (Q), (R), (S) and (T)
- Match the entries in **Column I** with the entries in **Column II**
- One or more entries in **Column I** may match will one or more entries in **Column II**
- The ORS Contains a 4×5 matrix whose layout will be similar to the one shown below:

(A)	(P)	(Q)	(R)	(S)	(T)
(B)	(P)	(Q)	(R)	(S)	(T)
(C)	(P)	(Q)	(R)	(S)	(T)
(D)	(P)	(Q)	(R)	(S)	(T)

- For each entry in **Column I**, darken the bubbles of all the matching entries. For example, if entry (A) in **Column I** matches with entries (Q), (R) and (T), then darken these three bubbles in the ORS. Similarly, for entries (B), (C) and (D).

- Marking scheme:

For each entry in **Column I**

+2 If only the bubble(s) corresponding to all the correct match(es) is(are) darkened

0 If none of the bubbles is darkened

-2 In all other cases

Q.39 Match the anionic species given in Column I that are present in the ore(s) given in Column II.

Column I	Column II
(a) Carbonate	(P) Siderite
(B) Sulphide	(Q) Malachite
(C) Hydroxide	(R) Bauxite
(D) Oxide	(S) Calamine

Q.40 Match the thermodynamic processes given Column I with the expressions given under Column II.

Column I	Column II
(a) Expansion of water at 273 K and 1atm	(P) $q = 0$
(B) Expansion of 1 mol of an ideal gas into a Vacuum under isolated conditions	(Q) $w = 0$
(C) Mixing of equal volumes of two ideal gases at Constant temperature and pressure in an isolated container	(R) $\Delta S_{sys} < 0$
(D) Reversible heating of H_2 (g) at 1atm from 300 K to 600 K, followed by reversible cooling to 300 K at 1atm	(S) $\Delta U = 0$
	(T) $\Delta U = 0$